

## 1の たしざん

1を たしてみよう。

$$\boxed{\text{🍏}} + \text{🍏} \rightarrow \boxed{\text{🍏 🍏}} \quad 1 + 1 = 2$$

$$\boxed{\text{🍏 🍏}} + \text{🍏} \rightarrow \boxed{\text{🍏 🍏 🍏}} \quad 2 + 1 = 3$$

$$\boxed{\text{🍏 🍏 🍏}} + \text{🍏} \rightarrow \boxed{\text{🍏 🍏 🍏 🍏}} \quad 3 + 1 = 4$$

$$\boxed{\text{🍏 🍏 🍏 🍏}} + \text{🍏} \rightarrow \boxed{\text{🍏 🍏 🍏 🍏 🍏}} \quad 4 + 1 = 5$$

$$\boxed{\text{🍏 🍏 🍏 🍏 🍏}} + \text{🍏} \rightarrow \boxed{\text{🍏 🍏 🍏 🍏 🍏 🍏}} \quad 5 + 1 = 6$$

$$\boxed{\text{🍏 🍏 🍏 🍏 🍏 🍏}} + \text{🍏} \rightarrow \boxed{\text{🍏 🍏 🍏 🍏 🍏 🍏 🍏}} \quad 6 + 1 = 7$$

$$\boxed{\text{🍏 🍏 🍏 🍏 🍏 🍏 🍏}} + \text{🍏} \rightarrow \boxed{\text{🍏 🍏 🍏 🍏 🍏 🍏 🍏 🍏}} \quad 7 + 1 = 8$$

$$\boxed{\text{🍏 🍏 🍏 🍏 🍏 🍏 🍏 🍏}} + \text{🍏} \rightarrow \boxed{\text{🍏 🍏 🍏 🍏 🍏 🍏 🍏 🍏 🍏}} \quad 8 + 1 = 9$$

$$\boxed{\text{🍏 🍏 🍏 🍏 🍏 🍏 🍏 🍏 🍏}} + \text{🍏} \rightarrow \boxed{\text{🍏 🍏 🍏 🍏 🍏 🍏 🍏 🍏 🍏 🍏}} \quad 9 + 1 = 10$$

## 1の たしざん

1に たしてみよう。

$$\text{Apple} + \boxed{\text{Apple}} \rightarrow \boxed{\text{Apple Apple}} \quad 1 + 1 = 2$$

$$\text{Apple} + \boxed{\text{Apple Apple}} \rightarrow \boxed{\text{Apple Apple Apple}} \quad 1 + 2 = 3$$

$$\text{Apple} + \boxed{\text{Apple Apple Apple}} \rightarrow \boxed{\text{Apple Apple Apple Apple}} \quad 1 + 3 = 4$$

$$\text{Apple} + \boxed{\text{Apple Apple Apple Apple}} \rightarrow \boxed{\text{Apple Apple Apple Apple Apple}} \quad 1 + 4 = 5$$

$$\text{Apple} + \boxed{\text{Apple Apple Apple Apple Apple}} \rightarrow \boxed{\text{Apple Apple Apple Apple Apple Apple}} \quad 1 + 5 = 6$$

$$\text{Apple} + \boxed{\text{Apple Apple Apple Apple Apple Apple}} \rightarrow \boxed{\text{Apple Apple Apple Apple Apple Apple Apple}} \quad 1 + 6 = 7$$

$$\text{Apple} + \boxed{\text{Apple Apple Apple Apple Apple Apple Apple}} \rightarrow \boxed{\text{Apple Apple Apple Apple Apple Apple Apple Apple}} \quad 1 + 7 = 8$$

$$\text{Apple} + \boxed{\text{Apple Apple Apple Apple Apple Apple Apple Apple}} \rightarrow \boxed{\text{Apple Apple Apple Apple Apple Apple Apple Apple Apple}} \quad 1 + 8 = 9$$

$$\text{Apple} + \boxed{\text{Apple Apple Apple Apple Apple Apple Apple Apple Apple}} \rightarrow \boxed{\text{Apple Apple Apple Apple Apple Apple Apple Apple Apple Apple}} \quad 1 + 9 = 10$$

## 1の たしざん

れいだい たしざんを しよう。

①  $1 + 1 =$

②  $2 + 1 =$

③  $3 + 1 =$

④  $4 + 1 =$

⑤  $5 + 1 =$

⑥  $6 + 1 =$

⑦  $7 + 1 =$

⑧  $8 + 1 =$

⑨  $9 + 1 =$

⑩  $1 + 2 =$

⑪  $1 + 3 =$

⑫  $1 + 4 =$

⑬  $1 + 5 =$

⑭  $1 + 6 =$

⑮  $1 + 7 =$

⑯  $1 + 8 =$

⑰  $1 + 9 =$

こたえ

①  $1 + 1 = 2$

②  $2 + 1 = 3$

③  $3 + 1 = 4$

④  $4 + 1 = 5$

⑤  $5 + 1 = 6$

⑥  $6 + 1 = 7$

⑦  $7 + 1 = 8$

⑧  $8 + 1 = 9$

⑨  $9 + 1 = 10$

⑩  $1 + 2 = 3$

⑪  $1 + 3 = 4$

⑫  $1 + 4 = 5$

⑬  $1 + 5 = 6$

⑭  $1 + 6 = 7$

⑮  $1 + 7 = 8$

⑯  $1 + 8 = 9$

⑰  $1 + 9 = 10$



1 たしざんを しよう。

$① \quad 1 + 1 =$

$② \quad 2 + 1 =$

$③ \quad 3 + 1 =$

$④ \quad 4 + 1 =$

$⑤ \quad 5 + 1 =$

$⑥ \quad 6 + 1 =$

$⑦ \quad 7 + 1 =$

$⑧ \quad 8 + 1 =$

$⑨ \quad 9 + 1 =$

2 たしざんを しよう。

$① \quad 1 + 1 =$

$② \quad 1 + 2 =$

$③ \quad 1 + 3 =$

$④ \quad 1 + 4 =$

$⑤ \quad 1 + 5 =$

$⑥ \quad 1 + 6 =$

$⑦ \quad 1 + 7 =$

$⑧ \quad 1 + 8 =$

$⑨ \quad 1 + 9 =$



1 たしざんを しよう。

$① \quad 4 + 1 =$

$② \quad 2 + 1 =$

$③ \quad 6 + 1 =$

$④ \quad 9 + 1 =$

$⑤ \quad 1 + 1 =$

$⑥ \quad 8 + 1 =$

$⑦ \quad 3 + 1 =$

$⑧ \quad 5 + 1 =$

$⑨ \quad 7 + 1 =$

2 たしざんを しよう。

$① \quad 1 + 2 =$

$② \quad 1 + 7 =$

$③ \quad 1 + 1 =$

$④ \quad 1 + 9 =$

$⑤ \quad 1 + 6 =$

$⑥ \quad 1 + 3 =$

$⑦ \quad 1 + 8 =$

$⑧ \quad 1 + 5 =$

$⑨ \quad 1 + 4 =$



1 たしざんを しよう。

①  $1 + 1 =$

②  $2 + 1 =$

③  $3 + 1 =$

④  $4 + 1 =$

⑤  $5 + 1 =$

⑥  $6 + 1 =$

⑦  $7 + 1 =$

⑧  $8 + 1 =$

⑨  $9 + 1 =$

2 たしざんを しよう。

①  $1 + 1 =$

②  $1 + 2 =$

③  $1 + 3 =$

④  $1 + 4 =$

⑤  $1 + 5 =$

⑥  $1 + 6 =$

⑦  $1 + 7 =$

⑧  $1 + 8 =$

⑨  $1 + 9 =$



1 たしざんを しよう。

①  $5 + 1 =$

②  $1 + 1 =$

③  $8 + 1 =$

④  $2 + 1 =$

⑤  $6 + 1 =$

⑥  $7 + 1 =$

⑦  $3 + 1 =$

⑧  $9 + 1 =$

⑨  $4 + 1 =$

2 たしざんを しよう。

①  $1 + 3 =$

②  $1 + 7 =$

③  $1 + 2 =$

④  $1 + 8 =$

⑤  $1 + 5 =$

⑥  $1 + 1 =$

⑦  $1 + 9 =$

⑧  $1 + 4 =$

⑨  $1 + 6 =$



たしざんを しよう。

①  $1 + 9 =$

②  $8 + 1 =$

③  $6 + 1 =$

④  $1 + 5 =$

⑤  $2 + 1 =$

⑥  $7 + 1 =$

⑦  $1 + 1 =$

⑧  $4 + 1 =$

⑨  $1 + 7 =$

⑩  $1 + 4 =$

⑪  $3 + 1 =$

⑫  $1 + 8 =$

⑬  $1 + 2 =$

⑭  $9 + 1 =$

⑮  $5 + 1 =$

⑯  $1 + 6 =$

⑰  $1 + 3 =$





たしざんを しよう。

①  $1 + 1 =$

②  $7 + 1 =$

③  $1 + 6 =$

④  $5 + 1 =$

⑤  $3 + 1 =$

⑥  $1 + 2 =$

⑦  $8 + 1 =$

⑧  $1 + 4 =$

⑨  $2 + 1 =$

⑩  $1 + 9 =$

⑪  $1 + 3 =$

⑫  $4 + 1 =$

⑬  $1 + 8 =$

⑭  $1 + 5 =$

⑮  $1 + 7 =$

⑯  $9 + 1 =$

⑰  $6 + 1 =$

1 たしざんを しよう。

①  $1 + 3 =$



②  $7 + 1 =$

③  $1 + 8 =$

④  $2 + 1 =$



⑤  $6 + 1 =$

2 えを たしざんの しきに なおして こたえを だそう。



①  + 



しき

こたえ

②  + 

③  + 

④  + 

⑤  + 

1 たしざんを しよう。

①  $1 + 5 =$



②  $4 + 1 =$

③  $9 + 1 =$

④  $3 + 1 =$

⑤  $1 + 7 =$

2 えを たしざんの しきに なおして こたえを だそう。

①  + 



しき

こたえ



<input type="text"/>	<input type="text"/>
----------------------	----------------------

②  + 



<input type="text"/>	<input type="text"/>
----------------------	----------------------

③  + 

<input type="text"/>	<input type="text"/>
----------------------	----------------------

④  + 

<input type="text"/>	<input type="text"/>
----------------------	----------------------

⑤  + 

<input type="text"/>	<input type="text"/>
----------------------	----------------------

1 たしざんを しよう。

①  $7 + 1 =$

②  $9 + 1 =$



③  $4 + 1 =$

④  $1 + 5 =$



⑤  $1 + 8 =$

⑥  $6 + 1 =$



2 えを たしざんの しきに なおして こたえを だそう。

①  + 



しき	こたえ
<input type="text"/>	<input type="text"/>

②  + 

<input type="text"/>	<input type="text"/>
----------------------	----------------------

③  + 

<input type="text"/>	<input type="text"/>
----------------------	----------------------

④  + 

<input type="text"/>	<input type="text"/>
----------------------	----------------------